

KENDRIYA VIDYALAYA CHENANI

WORKSHEET

CLASS-2ND

NAME- -----

SUBJECT-MATHS

ROLL NO.- -----

MONTH-NOVEMBER

TOPIC-TENS AND ONES

COMPETENCY-FORMING NUMBERS

Q1. Break these numbers up. One is done for you:

(a) $64 = 60 + 4$

(b) $32 =$

(c) $84 =$

(d) $48 =$

Q2. One  stands for 10 good chits. One  stands for 1 good chit. Using these signs indicate the following:


(a) 23 good chits =

(b) 41 good chits =

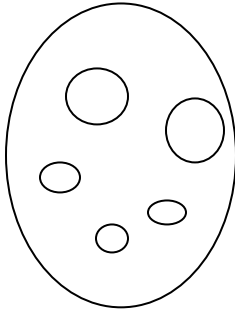
(c) 20 good chits =

(d) 52 good chits =

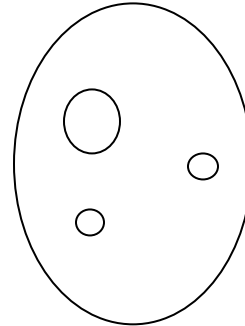
Q3. In a cricket match, players scored runs. Study each circle. Each big dot equals to 10 runs and each small dot equals to 1 run. Find the total runs scored by the following players:



RAHUL -



KARAN -



SUNIL -

Q4. Fill in the blanks:

(a) $37 = \square + 7$

(b) $\square + 20 = 23$

(c) $\square = 90 + 2$

(d) $\square = 60 + 1$

Q5. Match the following:

- | | |
|--------|-----------------------|
| (a) 66 | (i) 4 tens + 0 ones |
| (b) 16 | (ii) 7 tens + 4 Ones |
| (c) 40 | (iii) 6 tens + 6 Ones |
| (d) 74 | (iv) 1 tens + 6 Ones |

Q6. Write the table of 8 and 9:

Parents signature.....

Shobha